




Machine Tally

NAME: _____

Which of these Cat® machines do children like the best? Ask your classmates. Make one tally mark for each classmate's answer. Then calculate the total for each machine.

Favorite Machine at the Caterpillar Visitors Center		Total
797F Mining Truck 		
CT660 Vocational Truck 		
318E Hydraulic Excavator 		

Use the tally chart to answer the following questions.

1. Which machine did the most children choose? Circle one.



2. How many children chose the _____ children



3. How many children in all chose both _____ children



4. How many children in all chose both _____ children



5. Order the machines from least to most votes. Write 1 for the least and 3 for the most votes.