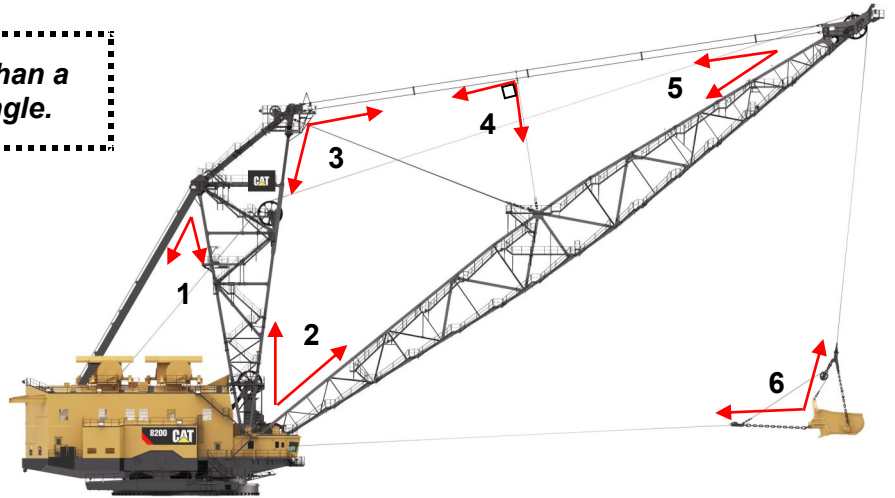


Identify Dragline Angles

Name _____

Cat® Draglines have been the standard of the mining industry for decades. These purpose-built machines are designed to withstand the most demanding conditions. Integrate Cat engine, drivetrain and hydraulic systems deliver the power and response needed for peak performance.

Tell if the angle is a right angle, less than a right angle, or greater than a right angle.

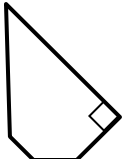


- Angle 1 _____
- Angle 2 _____
- Angle 3 _____
- Angle 4 _____
- Angle 5 _____
- Angle 6 _____



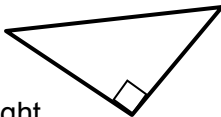
Write how many of each type of angle the shape has.

Shape 1



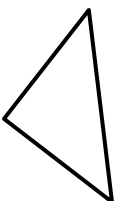
_____ right
 _____ less than a right
 _____ greater than a right

Shape 2




_____ right
 _____ less than a right
 _____ greater than a right

Shape 3



_____ right
 _____ less than a right
 _____ greater than a right

Shape 4



_____ right
 _____ less than a right
 _____ greater than a right