


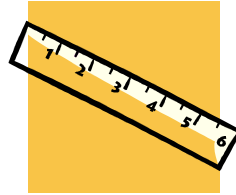
Choose a Tool

Name: _____

Different measuring tools are used for different size objects. Find the objects shown below and list what measuring tool you would use. Estimate the length.



Ruler – centimeter



Ruler – inches





Measuring tape



Yardstick

1. Lobby



Measuring tool: _____

Estimated length: _____

*Measure the bottom of the triangle in the "A".

2. Heritage





Measuring tool: _____

Estimated length: _____

*Measure the length of one of the black bars.

3. Product Development



Measuring tool: _____

Estimated length: _____

*Measure the length of the left Motorgrader joystick.

4. Dealer Gallery



Measuring tool: _____

Estimated length: _____

*Measure the length of the black logo box.

5. Product Floor



Measuring tool: _____

Estimated length: _____

*Measure the base of the racecar platform.